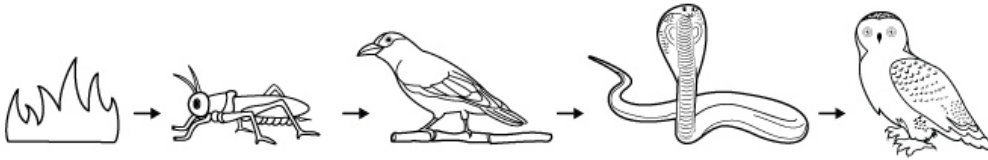


FOOD WEBS and FOOD CHAINS

Name: _____ Grade: _____ Date: _____

Look at the given food chain and answer the following questions.



Q1. What does the arrow mean in a food chain?

Q2. Name the producer in the food chain.

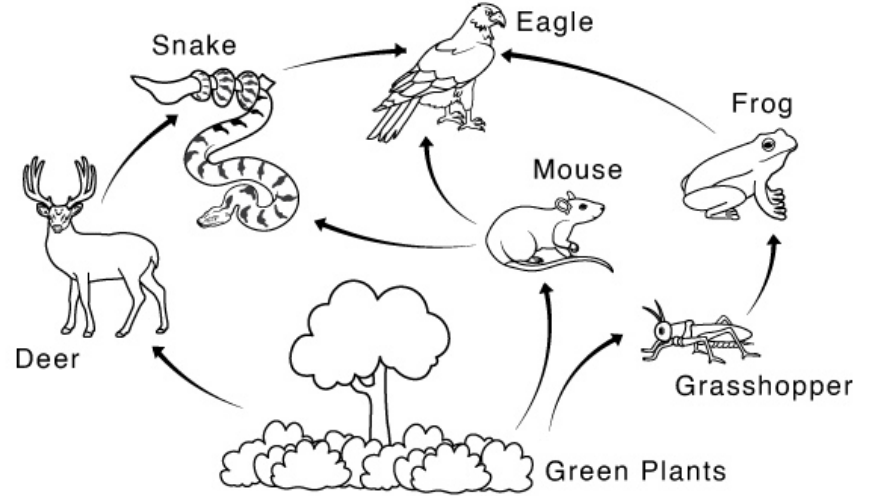
Q3. Name the primary consumer in the food chain.

Q4. Name the secondary consumer in the food chain.

Q5. Name the tertiary consumer in the food chain.

Q6. Name the apex predator in the food chain.

Look at the food web and answer the following questions.



Q1. Name the producer in the food web.

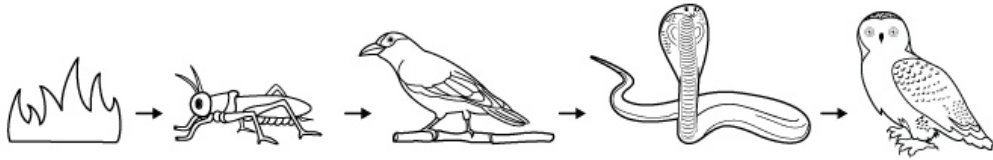
Q2. Name three consumers in the food web.

Q3. What does a frog eat?

Q4. Name the apex predator in the food web.

FOOD WEBS and FOOD CHAINS

Name: _____ Grade: _____ Date: _____



Q1. What does the arrow mean in a food chain?

Arrow indicates the flow of energy in a food chain

Q2. Name the producer in the food chain.

Grass

Q3. Name the primary consumer in the food chain.

Grasshopper

Q4. Name the secondary consumer in the food chain.

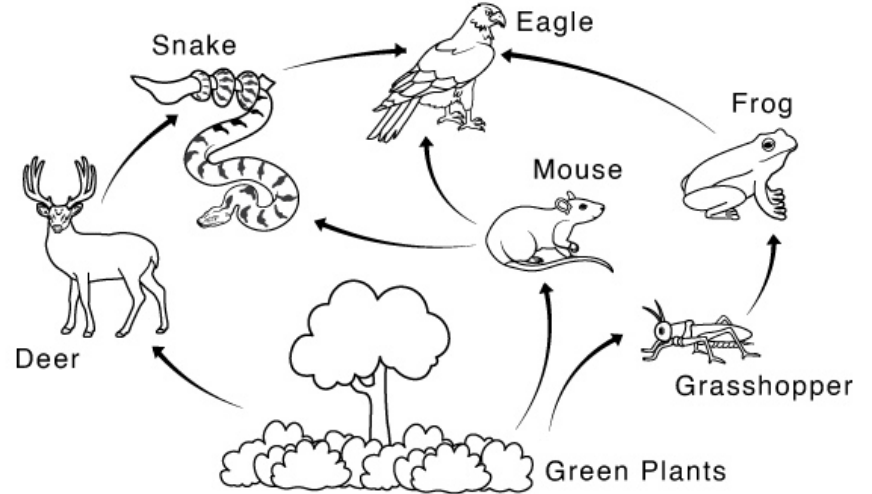
Bird

Q5. Name the tertiary consumer in the food chain.

Snake

Q6. Name the apex predator in the food chain.

Owl



Q1. Name the producer in the food web.

Green plants

Q2. Name three consumers in the food web.

Deer, mouse, and grasshopper

Q3. What does a frog eat?

Grasshopper

Q4. Name the apex predator in the food web.

Eagle